



Ladybird Doubles


Write the number sentence for each ladybird double.




$1 + 1 = \underline{\hspace{2cm}}$




$2 + 2 = \underline{\hspace{2cm}}$



$3 + 3 = \underline{\hspace{2cm}}$




$4 + 4 = \underline{\hspace{2cm}}$




$5 + 5 = \underline{\hspace{2cm}}$

Ladybird Doubles


Write the number sentence for each ladybird double.




$6 + 6 = \underline{\hspace{2cm}}$




$7 + 7 = \underline{\hspace{2cm}}$



$8 + 8 = \underline{\hspace{2cm}}$



$9 + 9 = \underline{\hspace{2cm}}$



$10 + 10 = \underline{\hspace{2cm}}$

